

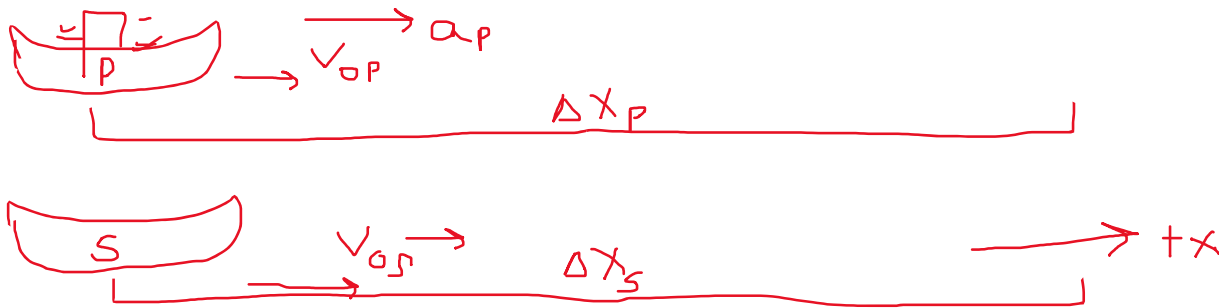
Class Activity

How do we know what step is next?

A speedboat traveling at a constant velocity of 20 m/s passes a police boat at rest. The police boat starts up 8 seconds after the speedboat passes, and accelerates at 2.3 m/s^2 . When and where does the cop catch the speedboat?

Qualitative Representation

How did I know how to draw these sketches?



Variables and Equations

How do I know what variables to list here? List them and explain how you know.

How do I know what equations I can use to get an answer? List them and explain how you know.

Solution (remember, show your reasoning and math)

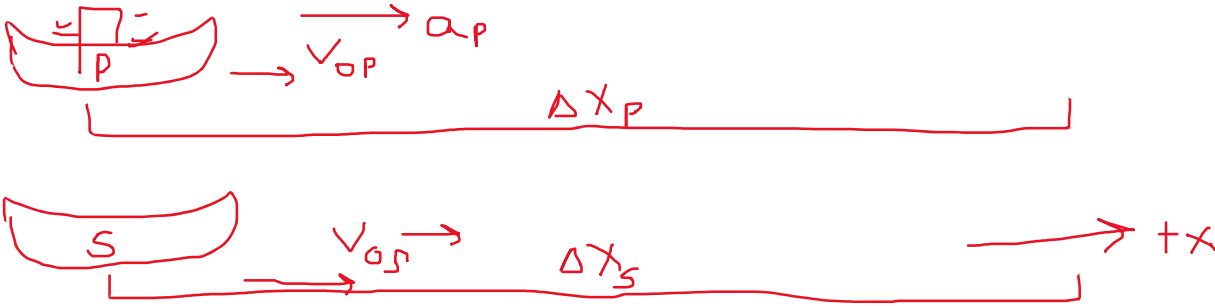
Reasonability check?

Class Activity

How do we know what step is next?

A speedboat traveling at a constant velocity of 20 m/s passes a police boat at rest. The police boat starts up 8 seconds after the speedboat passes, and accelerates at 2.3 m/s^2 . When and where does the cop catch the speedboat?

Qualitative Representation



Variables and Equations

$$v_{0P} = 0 \quad a_P = 2.3 \text{ m/s}^2 \quad \Delta t_P = \Delta t_S - 8 = ?$$

$$v_S = 20 \text{ m/s} \quad \Delta x_P = \Delta x_S = ?$$

$$\Delta x = v_0 \Delta t + \frac{1}{2} a (\Delta t)^2$$

Solution (remember, show your reasoning and math)

$$\Delta x_S = v_{0S} \Delta t_S + \frac{1}{2} a_S (\Delta t_S)^2 = (20) \Delta t_S + 0$$

$$\Delta x_P = v_{0P} \Delta t_P + \frac{1}{2} a_P (\Delta t_P)^2 = 0 + \frac{1}{2} (2.3) (\Delta t_P)^2$$

$$\Delta x_P = \Delta x_S$$

How do I know that the above is right, and that I should do those steps? Explain.

What comes next?

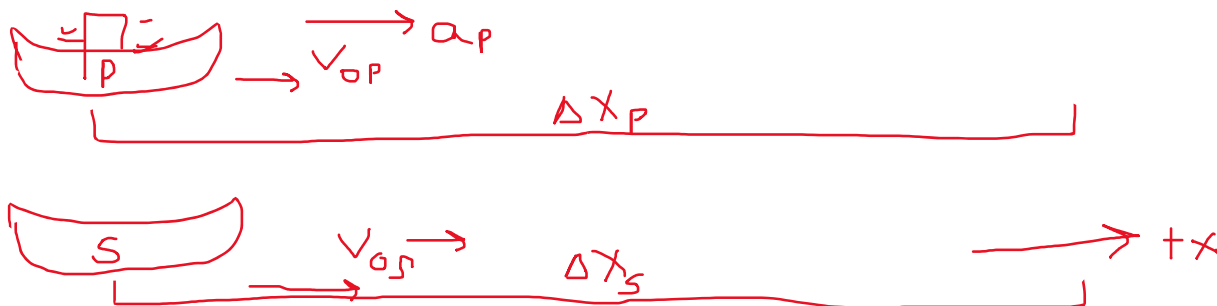
Reasonability check?

Class Activity

How do we know what step is next?

A speedboat traveling at a constant velocity of 20 m/s passes a police boat at rest. The police boat starts up 8 seconds after the speedboat passes, and accelerates at 2.3 m/s^2 . When and where does the cop catch the speedboat?

Qualitative Representation



Variables and Equations

$$v_{0p} = 0 \quad a_p = 2.3 \text{ m/s}^2 \quad \Delta t_p = \Delta t_s - 8 = ?$$

$$v_s = 20 \text{ m/s} \quad \Delta x_p = \Delta x_s = ?$$

$$\Delta x = v_0 \Delta t + \frac{1}{2} a (\Delta t)^2$$

Solution (remember, show your reasoning and math)

$$\Delta x_s = v_{0s} \Delta t_s + \frac{1}{2} a_s (\Delta t_s)^2 = (20) \Delta t_s + 0$$

$$\Delta x_p = v_{0p} \Delta t_p + \frac{1}{2} a_p (\Delta t_p)^2 = 0 + \frac{1}{2} (2.3) (\Delta t_p)^2$$

$$\Delta x_p = \Delta x_s$$

$$(20) \Delta t_s = \frac{1}{2} (2.3) (\Delta t_p)^2$$

$$(20) (\Delta t_p + 8) = \frac{1}{2} (2.3) (\Delta t_p)^2$$

$$20 \Delta t_p + 160 = 1.15 (\Delta t_p)^2$$

$$1.15 \Delta t_p^2 - 20 \Delta t_p - 160 = 0$$

$$\Delta t_p = 23.3 \text{ s or } -5.96 \text{ s}$$

Police officer drives for 23.3 s; speedboat drives for $23.3 + 8 = 31.3 \text{ s}$

$$\Delta x_p = \frac{1}{2} (2.3) (23.3)^2 = 624.3 \text{ m distance they travel}$$

Reasonability check?

Speedboat distance $(20) \Delta t_s = 20(23.3 + 8) = 626 \text{ m}$ – same distance, within rounding errors

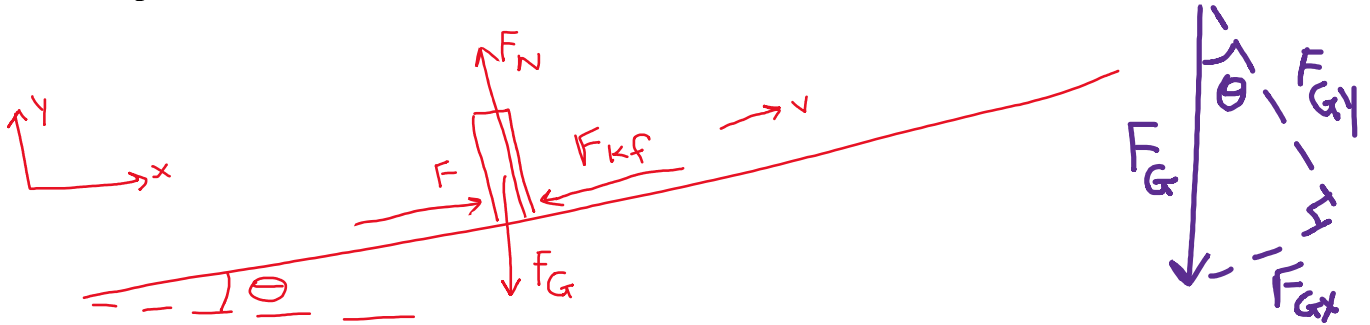
So these numbers check out

Class Activity

How do we know what step is next?

A person pushes a filing cabinet up a ramp that's inclined 25 degrees from the horizontal, with a constant force (parallel to ramp) of 440 N, and it moves at a constant speed of 6.2 m/s. If the total mass of the filing cabinet is 82 kg, what is the coefficient of friction between the filing cabinet and the ramp?

Qualitative Representation



How do I know to create components for the gravitational force vector?

How do I know which trig function for x and y components of the gravitational force vector?

How do I know which forces are along the ramp, perpendicular to the ramp – or in another direction completely?

Variables and Equations

$$\theta = 25^\circ \quad F = 440 \text{ N} \quad v_x = 6.2 \text{ m/s (constant)} \quad a_x = 0$$

$$m = 82 \text{ kg} \quad g = 9.8 \text{ m/s}^2 \quad a_y = 0 \quad \mu_k = ?$$

$$\Sigma F_x = ma_x \quad \Sigma F_y = ma_y \quad F_{kf} = \mu_k |F_N| \quad F_G = mg \quad \text{How did I know which equations to use?}$$

Explain how I know.

Solution (remember, show your reasoning and math)

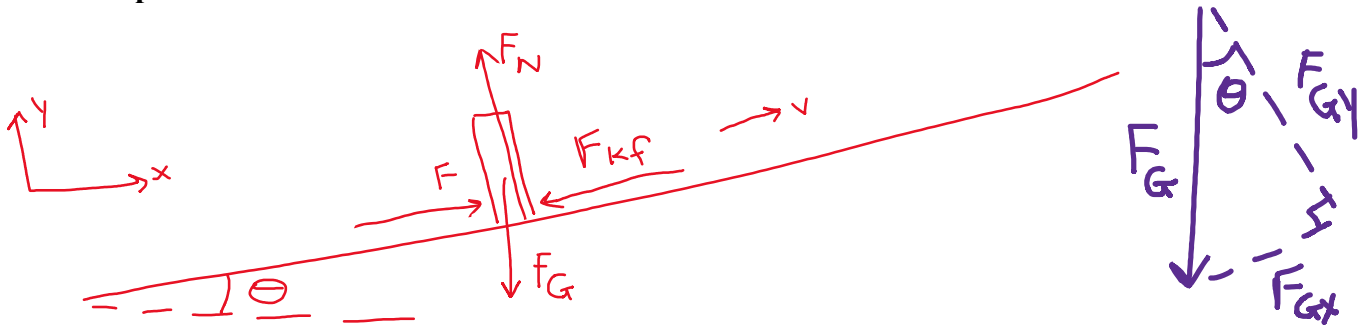
Reasonability check?

Class Activity

How do we know what step is next?

A person pushes a filing cabinet up a ramp that's inclined 25 degrees from the horizontal, with a constant force (parallel to ramp) of 440 N, and it moves at a constant speed of 6.2 m/s. If the total mass of the filing cabinet is 82 kg, what is the coefficient of friction between the filing cabinet and the ramp?

Qualitative Representation



Variables and Equations

$$\theta = 25^\circ \quad F = 440 \text{ N} \quad v_x = 6.2 \text{ m/s (constant)} \quad a_x = 0$$

$$m = 82 \text{ kg} \quad g = 9.8 \text{ m/s}^2 \quad a_y = 0 \quad \mu_k = ?$$

$$\Sigma F_x = ma_x \quad \Sigma F_y = ma_y \quad F_{kf} = \mu_k |F_N| \quad F_G = mg$$

Solution (remember, show your reasoning and math)

$$\Sigma F_y = ma_y \quad \text{why is this step necessary? Explain.}$$

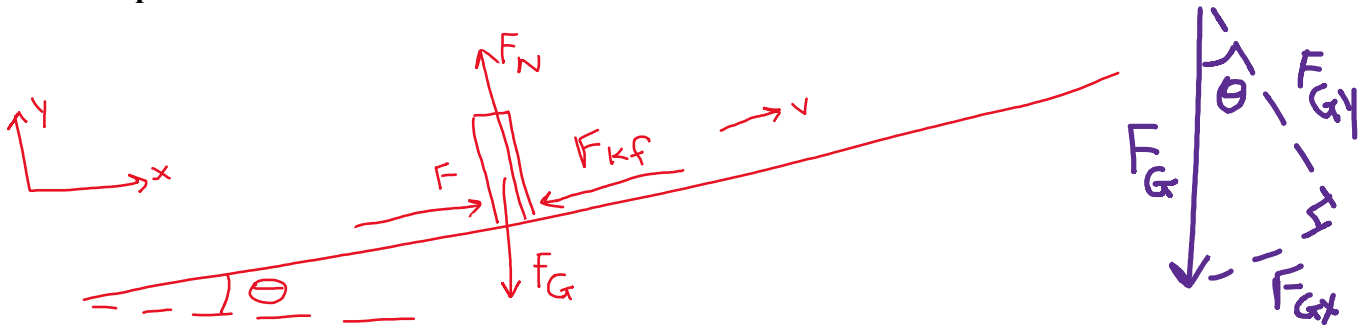
Reasonability check?

Class Activity

How do we know what step is next?

A person pushes a filing cabinet up a ramp that's inclined 25 degrees from the horizontal, with a constant force (parallel to ramp) of 440 N, and it moves at a constant speed of 6.2 m/s. If the total mass of the filing cabinet is 82 kg, what is the coefficient of friction between the filing cabinet and the ramp?

Qualitative Representation



Variables and Equations

$$\theta = 25^\circ \quad F = 440 \text{ N} \quad v_x = 6.2 \text{ m/s (constant)} \quad a_x = 0$$

$$m = 82 \text{ kg} \quad g = 9.8 \text{ m/s}^2 \quad a_y = 0 \quad \mu_k = ?$$

$$\Sigma F_x = ma_x \quad \Sigma F_y = ma_y \quad F_{kf} = \mu_k |F_N| \quad F_G = mg$$

Solution (remember, show your reasoning and math)

$$\Sigma F_y = ma_y$$

$$F_N - F_{Gy} = 0$$

$$F_N - F_G \cos \theta = 0$$

$$F_N = (82)(9.8) \cos 25^\circ = 728.3 \text{ N}$$

What step is next? How do I know what to do?

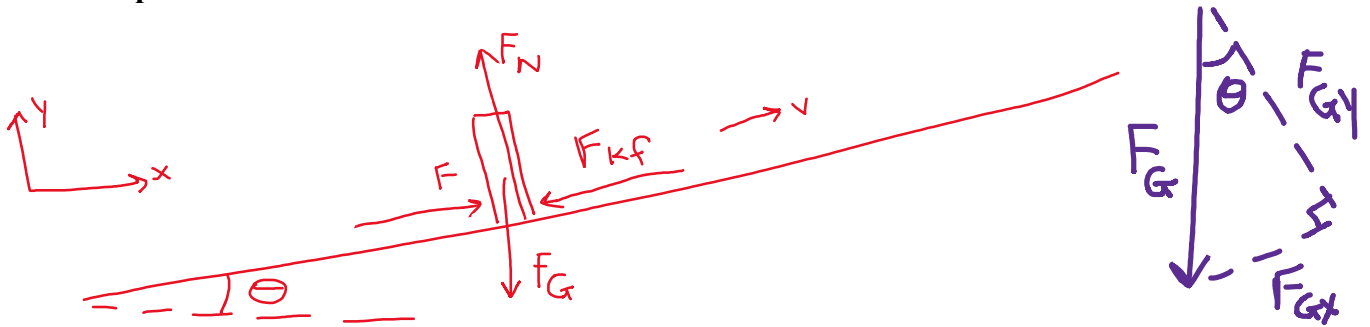
Reasonability check?

Class Activity

How do we know what step is next?

A person pushes a filing cabinet up a ramp that's inclined 25 degrees from the horizontal, with a constant force (parallel to ramp) of 440 N, and it moves at a constant speed of 6.2 m/s. If the total mass of the filing cabinet is 82 kg, what is the coefficient of friction between the filing cabinet and the ramp?

Qualitative Representation



Variables and Equations

$$\theta = 25^\circ \quad F = 440 \text{ N} \quad v_x = 6.2 \text{ m/s (constant)} \quad a_x = 0$$

$$m = 82 \text{ kg} \quad g = 9.8 \text{ m/s}^2 \quad a_y = 0 \quad \mu_k = ?$$

$$\Sigma F_x = ma_x \quad \Sigma F_y = ma_y \quad F_{kf} = \mu_k |F_N| \quad F_G = mg$$

Solution (remember, show your reasoning and math)

$$\Sigma F_y = ma_y$$

$$F_N - F_{Gy} = 0$$

$$F_N - F_G \cos \theta = 0$$

$$F_N = (82)(9.8) \cos 25^\circ = 728.3 \text{ N}$$

$$\Sigma F_x = ma_x$$

What do I do with this? Explain.

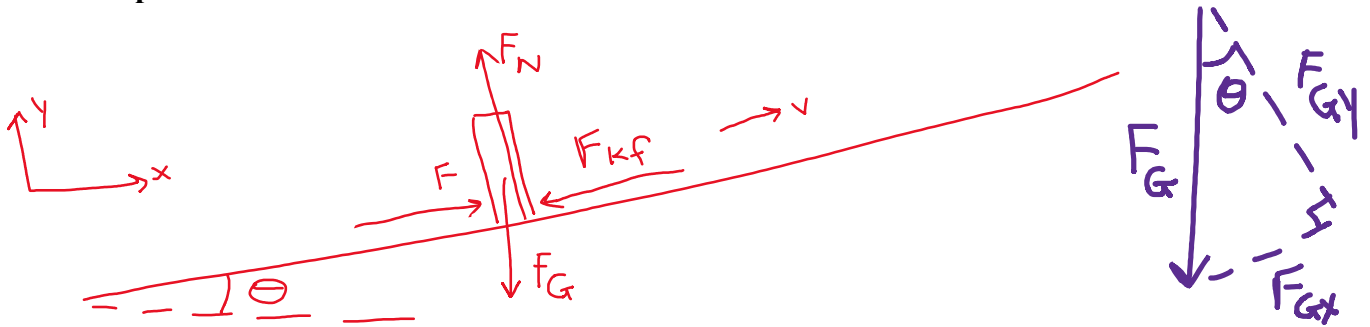
Reasonability check?

Class Activity

How do we know what step is next?

A person pushes a filing cabinet up a ramp that's inclined 25 degrees from the horizontal, with a constant force (parallel to ramp) of 440 N, and it moves at a constant speed of 6.2 m/s. If the total mass of the filing cabinet is 82 kg, what is the coefficient of friction between the filing cabinet and the ramp?

Qualitative Representation



Variables and Equations

$$\theta = 25^\circ \quad F = 440 \text{ N} \quad v_x = 6.2 \text{ m/s (constant)} \quad a_x = 0$$

$$m = 82 \text{ kg} \quad g = 9.8 \text{ m/s}^2 \quad a_y = 0 \quad \mu_k = ?$$

$$\Sigma F_x = ma_x \quad \Sigma F_y = ma_y \quad F_{kf} = \mu_k |F_N| \quad F_G = mg$$

Solution (remember, show your reasoning and math)

$$\Sigma F_y = ma_y$$

$$F_N - F_{Gy} = 0$$

$$F_N - F_G \cos \theta = 0$$

$$F_N = (82)(9.8) \cos 25^\circ = 728.3 \text{ N}$$

$$\Sigma F_x = ma_x$$

$$F - F_{kf} - F_{Gx} = 0$$

$$440 - \mu_k(728.3) - (82)(9.8) \sin 25^\circ = 0$$

$$100.38 = \mu_k(728.3)$$

$$\mu_k = 0.138$$

Reasonability check?

The coefficient of kinetic friction should be between 0 and 1. The value close to 0.1 indicates this ramp might be a little smoother than the average floor, but it isn't super slippery.